


Time to the Half Hour and Quarter Hour

Write the time shown on each clock in two ways.

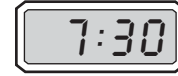
1.




2.



3.



4.



5.



6.



7. **Reasoning** The school bus stops at Randy's stop at 8:15 A.M. Randy arrived at the bus stop at quarter after 8. Did he miss the bus? Explain.

8. Which does **NOT** describe the time shown on the clock?

- A five forty-five
- B five fifteen

- C quarter after five
- D fifteen minutes after five

