



Time to the Minute

Write the time shown on each clock in two ways.

1.




2.



3.



4.



5.



6.



7. **Geometry** What type of angle is formed by a clock's hands when it is 3:00?

8. The movie Mike watched lasted 1 hour 26 minutes. How many minutes did the movie last?

9. Jan's alarm clock sounded at the time shown on the clock below. At what time did the alarm clock sound?

A six ten

C six thirty-eight

B six twenty-two

D seven twenty-two

