
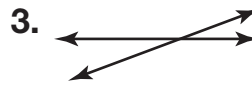



Lines and Line Segments

Write the name for each.



Draw and label a picture of each.

5. Parallel lines

6. Line segment

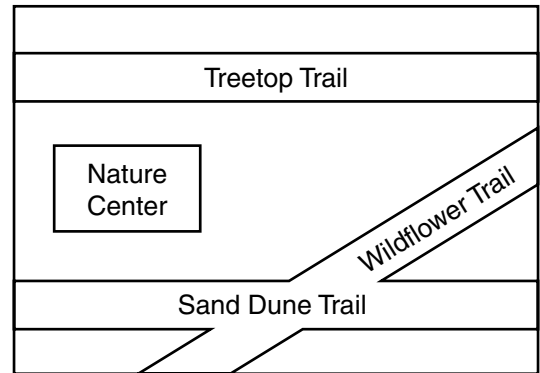
7. Intersecting lines

8. Line

For **9** and **10**, use the map at the right. Tell if the trails named look like intersecting lines or parallel lines.

9. Treetop and Sand Dune

10. Sand Dune and Wildflower



11. **Explain It** What is the difference between a line and a line segment?

12. How many times does a pair of intersecting lines cross?

A Never

B 1 time

C 2 times

D 3 times