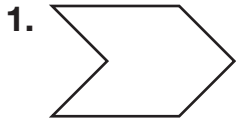
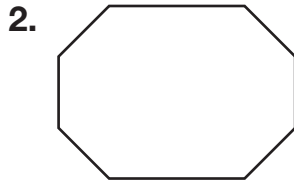


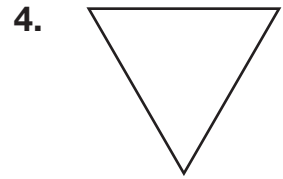
Polygons

Name the polygon.

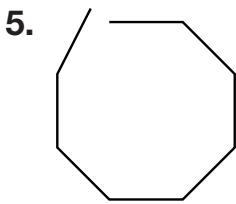





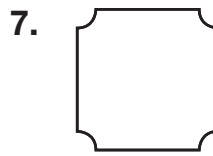


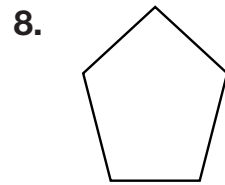


Is each figure a polygon? If it is not, explain why.

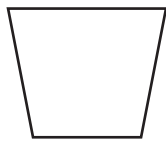
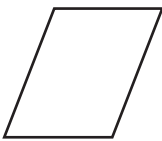








9. **Explain It** Juan said that the two figures below are quadrilaterals. Is he correct? Explain.



10. **Reasoning** If two of the line segments of a polygon are parallel, what is the least number of sides it could have?

11. How many more sides does an octagon have than a pentagon?

A 1

B 2

C 3

D 4