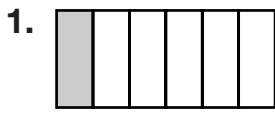
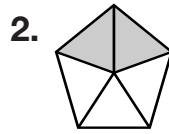


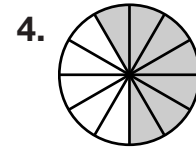
Fractions and Regions

Write the fraction of each figure that is shaded.









Draw a picture to show each fraction.

5. $\frac{3}{8}$

6. $\frac{1}{4}$

7. $\frac{4}{5}$

In **8** and **9**, use the information below.

Three parts of a rectangle are red. Two parts are blue.

8. What fraction of the rectangle is red?

- 9.
- Reasoning**
- What fraction of the rectangle is blue?

- 10.
- Draw a Picture**
- A banner is made of 8 equal parts. Five of the parts contain stars. Three of the parts contain hearts. Draw the banner.

11. How can you write the fraction
- $\frac{4}{6}$
- in word form?

A fourth sixth

B four sixes

C four sixths

D fourth six