



Different Shapes with the Same Perimeter

Draw a figure with the given perimeter on the grid paper.


1. 10 units




2. 16 units



3. 14 units



4. 18 units



5. **Writing to Explain** Can you draw a square with a perimeter of 20 units? Explain why or why not.

6. **Number Sense** Name the lengths of the sides of three rectangles with perimeters of 12 units. Use only whole numbers.

7. Which figures have the same perimeter?

